



# INTEGRATED INDIAN SCHOOL KUWAIT


## SUMMER VACATION HOLIDAY HOMEWORK

### SUBJECT: BANGLA

1. Handwriting: Write one page daily from any moral/fairy tale books in Bangla in a separate single lined notebook. (Not in class work notebook).
2. Write about the places you have visited during the summer holidays (with colorful pictures)
3. Make a 3D chart on any one of the following topics : a. Noun b. Synonyms c. Bochon (singular- plural)
4. Make a chart on Biographical sketch of the famous poet Rabindranath Tagore.
5. Make a model of any national symbols like Shundarbon, Shohid Minar, Shritishoudho, National Parliament.

### HINDI

1. “ मेरी माँ ” पर ५ वाक्य लिखिए ।



.....

.....

.....  
.....  
.....

2. चित्र को देखकर दिए गये शब्दों की सहायता से पाँच वाक्य लिखिए ।



.....  
.....  
.....  
.....  
.....

3. अंडमान और निकोबर द्वीप के कुछ प्रमुख पर्यटक स्थलों के चित्र लगाइए और उनके नाम लिखिए

Do the above work in the CHART PAPER.

REVISE ALL THE WORK DONE IN CLASS.

## French



- 1) Write and learn the vocabulary of leçons 1, 2 & 3 (2 times)
- 2) Write and learn the question and answer of leçons 1 & 2 (2 times)
- 3) Write and learn les nombres 0- 50 (2 times)
- 4) Write and learn Les nationalités (2 times)
- 5) Write and learn the conjugations of être, avoir, aller, habiter, venir, ranger and parler
- 6) Write and learn Présentez-vous
- 7) Prepare the chart of Alphabetical nouns with pictures, Le Corps & Les Accents

## SUBJECT:- URDU

1. اسم اور فعل کی تعریف تین مثالوں کے ساتھ لکھ کر لائیں۔
2. گفتگو کے پانچ آداب لکھیے۔
3. نظم شام کو چارٹ پر لکھ کر لانا۔
4. میرا گھر، میرا دوست اور میرا وطن 6-8 لاینوں کا مضمون لکھ کر لانا
- 5-1 تک اردو میں گنتی لکھ کر لانا۔

5-جملے بناؤ:-

1. سفر 2. ملک، 3. آسمان 4. پھول 5. درخت

6. سبق 5-6-7 کو پڑھ کر آنا

### **SUB: ENGLISH**

1. Make a collage of common noun, proper noun, concrete noun, abstract noun, collective noun, countable and uncountable noun.
2. Write a small paragraph in A4 size paper about bees. Use the hints given below.

**Hints: bees live in a group in hives.... Each group of bees has a queen bee.... have stings.... collect nectar and make honey.... store honey in the hives should not catch them..... sting can be painful and harmful.**

3. Paste the pictures of Andaman and Nicobar Islands and write a short essay on it.
4. Look at the picture and frame four sentences for each.



---

---

---

---

---

---

---

---



---

---

---

---

---

---

---

---



---

---

---

---

---

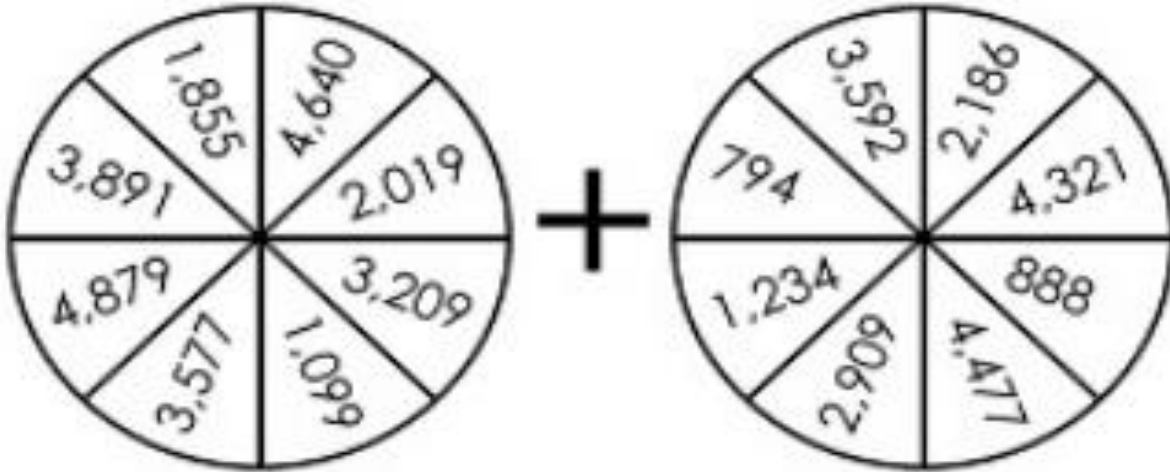
---

---

---

**SUBJECT : MATHS**

**Addition Circles**



Choose one number from each wheel.  
Add the numbers together.  
Do this six times with six different pairs of numbers.

a.	b.	c.
d.	e.	f.

**MULTIPLICATION**

0 – 5 YELLOW

10 – 15 BROWN


24 – 30 BLUE

6 – 9 PINK

16 – 21 PEACH

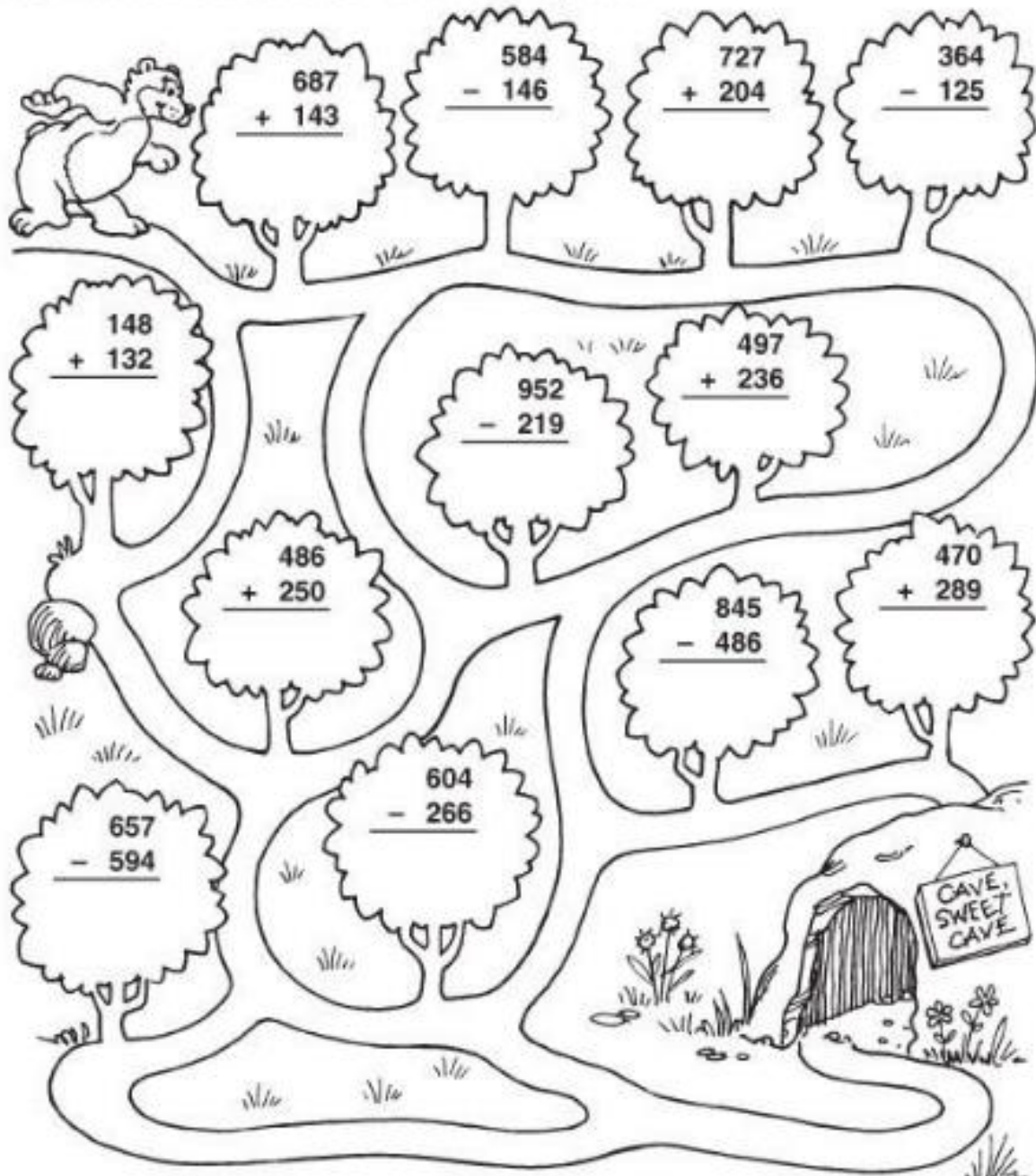
32 – 42 GREEN

45 – 100 ORANGE



## Follow the Trees

Add or subtract. Then trace the bear's path to its cave. The bear follows trees with sums that have a 3 in the tens place.





# Round It Up!

**DIRECTIONS**

Look at the number on the bat.  
 If the number on the ball is rounded to the nearest 10, color it red. If the number on the ball is rounded to the nearest 100, color it blue. If the number on the ball is not rounded to the nearest 10 or 100, color it purple.

## MATHS TABLES WORKING MODEL MODEL



<https://youtu.be/tGfabq6bLGU>

## ART INTEGRATED PROJECT

I. The following are the list of top 3 largest Islands in Andaman and Nicobar. Write the number name for those areas in words:

Island	Area
Middle Andaman	1,523 square kilometers
North Andaman	1,317 square kilometers
South Andaman	1,262 square kilometers

**Write the place value of underlined digit of the following**

i) 1,523 - \_\_\_\_\_

ii) 1,262 - \_\_\_\_\_

iii) 1,317 - \_\_\_\_\_

**II. The following are the Population Census of Lakshadweep for the year 2001 and 2011 respectively. Study the data carefully and answer the given questions.**

Total population of Lakshadweep as per 2011 census is 64,473 of which male and female are 33,123 and 31,350 respectively. In 2001,

total population was 60,650 in which males were 31,131 while females were 29,519.

Choose the correct answers:

i) The population of Lakshadweep as per 2011 census in number name.

- a. Sixty-four thousand four hundred and seventy-three.
- b. Sixty-four lakh four thousand seventy-three.
- c. Sixty-four hundred and seventy-three.

ii) The population of Lakshadweep as per 2001 census in number name.

- a. Sixteen thousand six hundred and fifteen.
- b. Sixty six hundred and fifteen.
- c. Sixty thousand six hundred and fifty

iii) In 2001, total population was 60,650 in which males were 31,131 while females were 29,519. What is the difference between males and females of the given and how much?

- a. 1,112
- b. 2,612
- c. 1,612

iv) In which year the female population was high and how much?


a. 2011 – 29,519

b. 2011 – 31,350

c. 2001 – 31,131

### SUBJECT: SCIENCE

*I. Pictures below show many things. Group them into living and non-living things:*



***LIVING THINGS***

***NON-LIVING THINGS***

--	--

**II. Complete the story of a The Little Plant using the words from the box:**

<i>roots</i>	<i>Stem</i>	<i>leaf</i>	<i>food</i>	<i>seed</i>	<i>fruit</i>	<i>Flower</i>
--------------	-------------	-------------	-------------	-------------	--------------	---------------

*Three little droplets of water Tiny, Droppy and Timmy enter a plant through its \_\_\_\_\_. They reach the \_\_\_\_\_ which is like a soft green pipe. This pipe takes them to various parts of the plant. Tiny tot goes to a very colourful sweet smelling \_\_\_\_\_.*

*Droppy goes to the \_\_\_\_\_ which is flat and green. Timmy enters a \_\_\_\_\_ that is round and sour with a \_\_\_\_\_ inside it. Tiny Tot and Timmy stay as it is with the plant for a long time. Droppy on the other hand help the plant to prepare \_\_\_\_\_.*

**III. Give two examples of each:**

1. Name two roots that we eat: \_\_\_\_\_
2. Name two stems that we eat: \_\_\_\_\_
3. Name two leaves that we eat: \_\_\_\_\_
4. Name two fruits that we eat: \_\_\_\_\_
5. Name two seeds that we eat: \_\_\_\_\_
6. Name two flowers that we eat: \_\_\_\_\_

7. Name two animals that reproduce by laying eggs:

\_\_\_\_\_

8. Name two animals that reproduce by giving birth to young ones:

\_\_\_\_\_

9. Name two non- green plants: \_\_\_\_\_

10. Name two types of roots: \_\_\_\_\_

**IV. Write a single word for each:**

1. A type of root that has one main root and many small branch roots.

A. \_\_\_\_\_

2. Plants appear green due to this pigment.

A. \_\_\_\_\_

3. Animals that live on dead and decaying food.

A. \_\_\_\_\_

4. Animals that eat both plants and animals.

A. \_\_\_\_\_

**5. The tiny holes present on the leaves.**

A. \_\_\_\_\_

**6. A gas given out during photosynthesis.**

A. \_\_\_\_\_

**7. Animals that eat only flesh of other animals.**

A. \_\_\_\_\_

**8. The process of making food is called**

A. \_\_\_\_\_


**9. The kitchen of a plant or food factory of a plant.**

A. \_\_\_\_\_


**10. The process by which a seed becomes a seedling**

A. \_\_\_\_\_

**V. Draw a line from each plant part to the task that it does for the part:**



**VI. Fill in the necessary information in each column:**

<i>Picture</i>	<i>Name of the Animal</i>	<i>The food it eats and the way it eats</i>
		





**VII. ART INTEGRATED PROJECT**

*What are the main occupation of people in Andaman and Nicobar Island. Stick the pictures and write short notes on each occupation of the people. [ Do it on A4 size paper]*

## **SUBJECT: SOCIAL STUDIES**

Make a chart of Lakshadweep Islands and Andaman & Nicobar Islands on the following.

- Means of Transportation they use.
- Means of Communication they use.
- Clothes they wear.
- Famous Food to eat.